

Representing numbers using transistors is one thing, but getting the computer to do something with those numbers is an entirely different matter. Digital circuitry is used to perform operations such as addition or multiplication, manage data, or execute programs. This chapter presents the circuitry that is the foundation of data manipulation and management within a computer.

4.1 Logic Gate Basics

Unless you are an electrical engineer, an understanding of the operation of transistors is unnecessary. One level above the transistors, however, is a set of basic building blocks for digital circuitry. These building blocks are called *logic gates*, and it is at this level that we will begin our discussion.

A logic gate has the basic format shown below in Figure 4-1. It takes one or more binary signals as its inputs, and using a specific algorithm, outputs a single bit as a result. Each time the inputs change, the output bit changes in a predictable fashion.

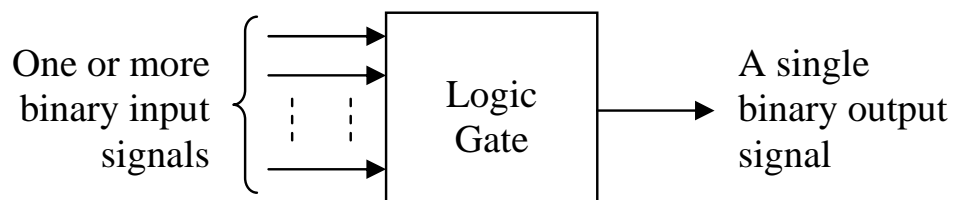


Figure 4-1 Basic Format of a Logic Gate

For example, the algorithm for a specific gate may cause a one to be output if an odd number of ones are present at the gate's input and a zero to be output if an even number of ones is present.

A number of standard gates exist, each one of which has a specific symbol that uniquely identifies its function. Figure 4-2 presents the symbols for the four primary types of gates that are used in digital circuit design.

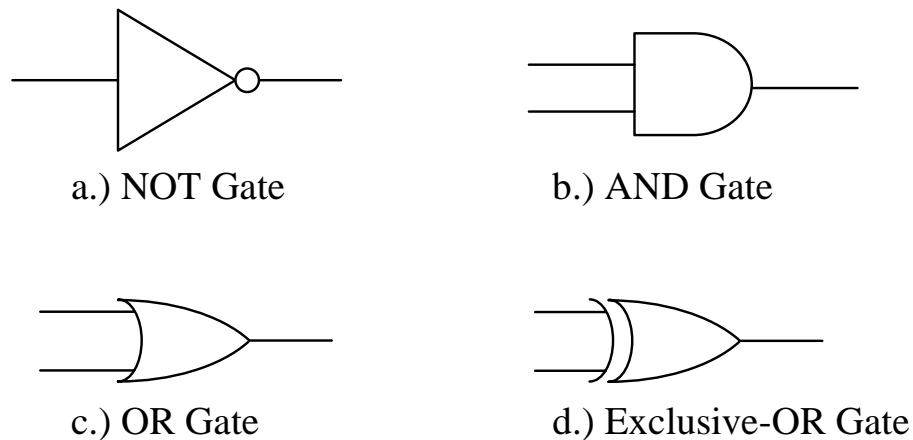


Figure 4-2 Basic Logic Symbols

4.1.1 NOT Gate

Let's begin with the *NOT gate*. This logic gate, sometimes referred to as an *inverter*, is the only one in Figure 4-2 that has a single input. Its input goes into the left side of a triangle symbol while its output exits the gate through a small circle placed at the tip of the opposite corner. Note that it is the small circle that defines the operation of this gate, so it should not be left out.

The NOT gate is used to flip the value of a digital signal. In other words, it changes a logic 1 input to a logic 0 or it changes a logic 0 input to a logic 1. An example of an inverter might be the light detection circuit used to control the automatic headlights of a car. During the daylight hours, sunshine enters the light detector which is typically installed on the top surface of the car's dashboard. This acts as a logic 1 input. Since it is daytime, the headlights need to be turned off, a logic 0. When the sun goes down and no light enters the light detector, a logic 0, then the headlights must be turned on, a logic 1. Figure 4-3 shows the operation of the NOT gate.



Figure 4-3 Operation of the NOT Gate

Note that with a single input, the NOT gate has only 2 possible states.

4.1.2 AND Gate

The operation of the **AND gate** is such that its output is a logic 1 **only** if all of its inputs are logic 1. Otherwise the output is a logic 0. The AND gate in Figure 4-2 has only two inputs, but an AND gate may have as many inputs as the circuit requires. Regardless of the number of inputs, all inputs must be a logic 1 for the output to be a logic 1.

As an example, picture a lamp that is connected to a plug in the wall that is subsequently controlled by the light switch that is protected with a circuit breaker. In order for the lamp to be on (logic 1), the switch at the lamp must be on (logic 1), the wall switch must be on (logic 1), and the circuit breaker must be on (logic 1). If any of the switches turns to off (logic 0), then the lamp will turn off. Another way to describe the operation of this circuit might be to say, "The lamp is on if and only if the lamp switch is on **and** the wall switch is on **and** the circuit breaker is on." This should give you a good idea of when an AND gate is used; just look for the use of the word "and" when describing the operation of the circuit.

Figure 4-4 shows all $2^2 = 4$ states for a two-input AND gate: 0-0, 0-1, 1-0, and 1-1.

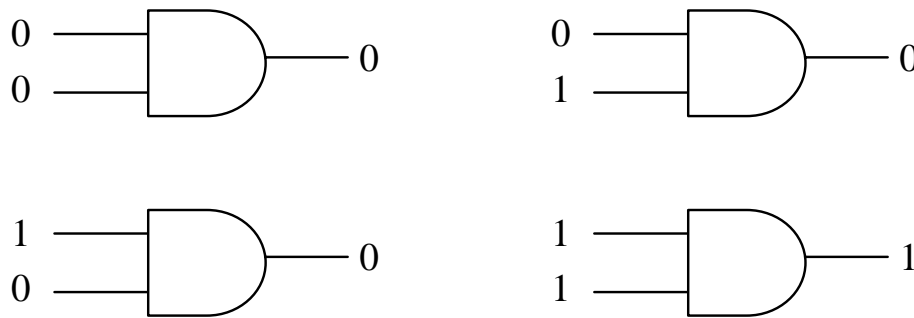


Figure 4-4 Operation of a Two-Input AND Gate

4.1.3 OR Gate

An **OR gate** outputs a logic 1 if **any** of its inputs are a logic 1. An OR gate only outputs a logic 0 if all of its inputs are logic 0. The OR gate in Figure 4-2 has only two inputs, but just like the AND gate, an OR gate may have as many inputs as the circuit requires. Regardless of the number of inputs, if any input is a logic 1, the output is a logic 1.

A common example of an OR gate circuit is a security system. Assume that a room is protected by a system that watches three inputs:

a door open sensor, a glass break sensor, and a motion sensor. If none of these sensors detects a break-in condition, i.e., they all send a logic 0 to the OR gate, the alarm is off (logic 0). If any of the sensors detects a break-in, it will send a logic 1 to the OR gate which in turn will output a logic 1 indicating an alarm condition. It doesn't matter what the other sensors are reading, if any sensor sends a logic 1 to the gate, the alarm should be going off. Another way to describe the operation of this circuit might be to say, "The alarm goes off if the door opens *or* the glass breaks *or* motion is detected." Once again, the use of the word "or" suggests that this circuit should be implemented with an OR gate.

Figure 4-5 shows the $2^2 = 4$ possible states for a two-input OR gate.

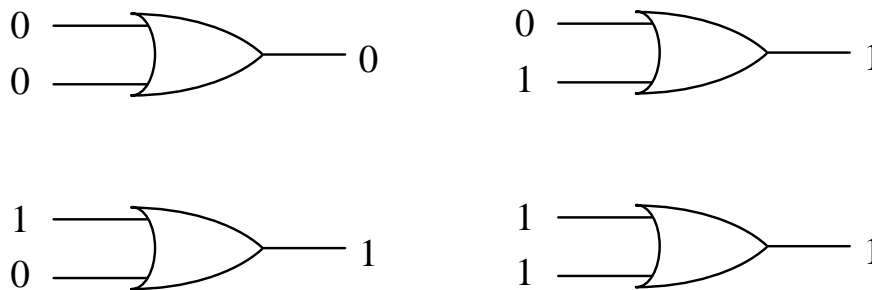


Figure 4-5 Operation of a Two-Input OR Gate

4.1.4 Exclusive-OR (XOR) Gate

An **Exclusive-OR gate** is sometimes called a parity checker. Parity checkers count the number of ones being input to a circuit and output a logic 1 or 0 based on whether the number of ones is odd or even. The Exclusive-OR (XOR) gate counts the number of ones at its input and outputs a logic 1 for an odd count and a logic 0 for an even count.

A common application for XOR gates is in error checking circuits. If two digital signals are compared bit-by-bit, an error free condition means that a logic 0 will be compared to a logic 0 and a logic 1 will be compared with a logic 1. In both of these cases, there is an even number of logic 1's being input to the XOR gate. Therefore, as long as the XOR gate outputs a logic 0, there is no error.

If, however, an error has occurred, then one signal will be logic 1 and the other will be a logic 0. This odd number of logic 1's will cause the XOR gate to output a logic 1 indicating an error condition.

Just as with the AND and OR gates, the XOR gate may have two or more inputs. Figure 4-6 shows all four states for a two-input XOR.

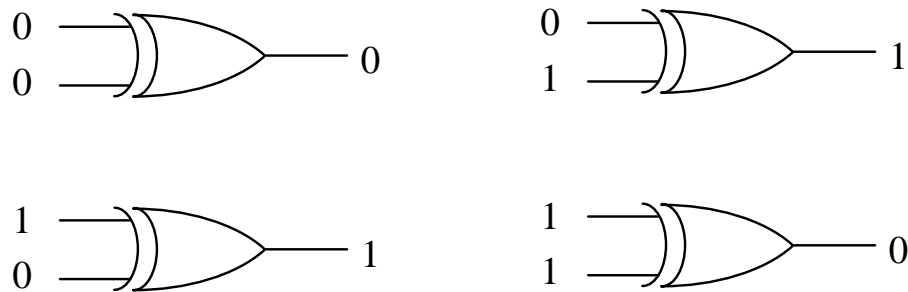


Figure 4-6 Operation of a Two-Input XOR Gate

These representations of logic gates can be an awkward way to describe the operation of a complex circuit. The next section will introduce an easier method for representing the operation of any digital circuit incorporating the NOT, AND, OR, and XOR gates.

4.2 Truth Tables

The previous section described the operation of each logic gate with words. This method isn't efficient and is prone to misinterpretation. What we need is a method to show the output of a digital system based on each of the possible input patterns of ones and zeros.

A *truth table* serves this purpose by making a column for each of the inputs to a digital circuit and a column for the resulting output. A row is added for each of the possible patterns of ones and zeros that could be input to the circuit. For example, a circuit with three inputs, A, B, and C, would have $2^3 = 8$ possible patterns of ones and zeros:

A=0, B=0, and C=0	A=1, B=0, and C=0
A=0, B=0, and C=1	A=1, B=0, and C=1
A=0, B=1, and C=0	A=1, B=1, and C=0
A=0, B=1, and C=1	A=1, B=1, and C=1

This means that a truth table representing a circuit with three inputs would have 8 rows. Figure 4-7 presents a sample truth table for a digital circuit with three inputs, A, B, and C, and one output, X. Note that the output X doesn't represent anything in particular. It is just added to show how the output might appear in a truth table.

A	B	C	X
0	0	0	1
0	0	1	0
0	1	0	1
0	1	1	1
1	0	0	0
1	0	1	1
1	1	0	0
1	1	1	1

Figure 4-7 Sample Three-Input Truth Table

For the rest of this book, the inputs to a digital circuit will be labeled with capital letters, A, B, C, etc., while the output will be labeled X.

For some, the hardest part of creating a truth table is knowing when we have listed all of the possible combinations of ones and zeros for the input. There are two tricks to help us here. First, we know that for n inputs, there must be 2^n different patterns of ones and zeros. Therefore, if your truth table doesn't have 2^n rows, you know that you haven't finished listing the patterns.

There is also a trick to deriving the combinations. Assume we need to build a truth table with four inputs, A, B, C, and D. Since $2^4 = 16$, we know that there will be sixteen possible combinations of ones and zeros. For half of those combinations, A will equal zero, and for the other half, A will equal one.

When A equals zero, the remaining three inputs, B, C, and D, will go through every possible combination of ones and zeros for three inputs. Three inputs have $2^3 = 8$ combinations, which coincidentally, is half of 16. For half of the 8 combinations, B will equal zero, and for the other half, B will equal one. This process can be repeated for each of the remaining inputs.

This gives us a process to create our truth table with four inputs. Begin with the A column and list eight zeros followed by eight ones. Half of eight is four, so go to the B column and write four zeros followed by four ones corresponding to the rows where A equals zero, then write four zeros followed by four ones corresponding to the rows where A equals one. Half of four equals two, so the C column will have two zeros followed by two ones followed by two zeros and so on. Repeating this process should end with the last column having

alternating ones and zeros. If done properly, the first row should have all zeros and the last row should have all ones.

A	B	C	D	X
0	0	0	0	
0	0	0	1	
0	0	1	0	
0	0	1	1	
0	1	0	0	
0	1	0	1	
0	1	1	0	
0	1	1	1	
1	0	0	0	
1	0	0	1	
1	0	1	0	
1	0	1	1	
1	1	0	0	
1	1	0	1	
1	1	1	0	
1	1	1	1	

Figure 4-8 Listing All Bit Patterns for a Four-Input Truth Table

In addition to verifying that all combinations of ones and zeros have been listed, this method also provides a consistency between all truth tables in the way that their rows are organized.

Now let's use truth tables to describe the functions of the four basic logic gates beginning with the inverter. The inverter has one input and one output. Therefore, there is one column for inputs and one column for outputs. For single input, there are exactly two possible states: logic 1 and logic 0. Therefore, there will be two rows of data for the inverter truth table. That table is shown in Figure 4-9.

A	X
0	1
1	0

Figure 4-9 Inverter Truth Table

Remember that an AND gate outputs a logic 1 *only* if all of its inputs are logic 1. Otherwise the output equals a logic 0. The operation

of a two-input AND gate can be represented with the truth table shown in Figure 4-10.

A	B	X
0	0	0
0	1	0
1	0	0
1	1	1

Figure 4-10 Two-Input AND Gate Truth Table

The output of an OR gate is set to logic 1 if either of the inputs are 1. The output is 0 *only* when both inputs are 0. Its truth table is shown below in Figure 4-11.

A	B	X
0	0	0
0	1	1
1	0	1
1	1	1

Figure 4-11 Two-Input OR Gate Truth Table

The XOR gate's output is set to logic 1 if there are an odd number of ones being input to the circuit. Figure 4-12 below shows that for a two-input XOR gate, this occurs twice, once for A=0 and B=1 and once for A=1 and B=0.

A	B	X
0	0	0
0	1	1
1	0	1
1	1	0

Figure 4-12 Two-Input XOR Gate Truth Table

In some cases, the output of a digital circuit can be known without knowing what all of the inputs are. The AND gate, for instance, outputs

a zero if *any* of the inputs equal zero. It doesn't matter what the other inputs are.

This can be represented in a truth table by using a third type of input called a "don't care". The "don't care", written as an "X" in one of the input columns, indicates that it doesn't matter whether this input is a 1 or a 0, the output remains the same.

Take for example a three-input AND gate. There are four cases when the input A=0: A=0, B=0, and C=0; A=0, B=0, and C=1; A=0, B=1, and C=0; and A=0, B=1, and C=1. Each of these cases has an output of X=0. This can be shown in the truth table by replacing the four rows where A=0 with one row: A=0, B=X, and C=X.

Figure 4-13 shows the resulting truth table where "don't cares" are used to reduce the number of rows.

A	B	C	X
0	X	X	0
X	0	X	0
X	X	0	0
1	1	1	1

Figure 4-13 Three-Input AND Gate Truth Table With Don't Cares

In this example, the original eight-row truth table has been replaced with one having only 4 rows.

A similar truth table can be made for the OR gate. In this case, if *any* input to an OR gate is one, the output is 1. The only time an OR gate outputs a 0 is when *all* of the inputs are set to 0.

4.3 Timing Diagrams for Gates

The characteristic output of a logic gate can also be represented using a timing diagram such as those presented in Chapter 1. Figures 4-14, 4-15, and 4-16 show the output, X, that results from three binary input signals, A, B, and C, going into an AND gate, OR gate, and XOR gate respectively. Remember that the output of an AND gate is defined as a one if all inputs are equal to one, the output of an OR gate is defined as a one if any input is a one, and the output of an XOR gate is defined as a one if an odd number of ones is present at the input. Use these rules to verify the outputs shown in the figures.

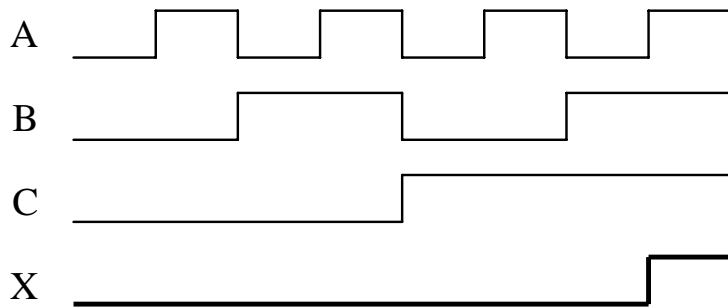


Figure 4-14 Sample Timing Diagram for a Three-Input AND Gate

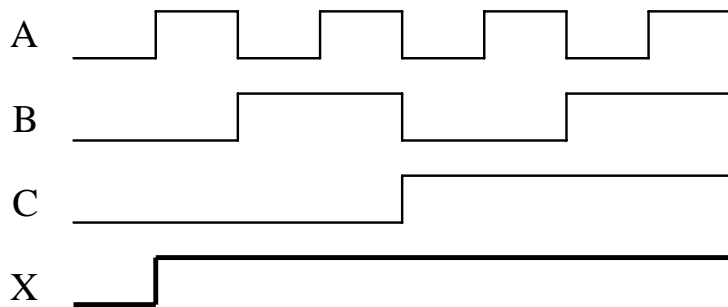


Figure 4-15 Sample Timing Diagram for a Three-Input OR Gate

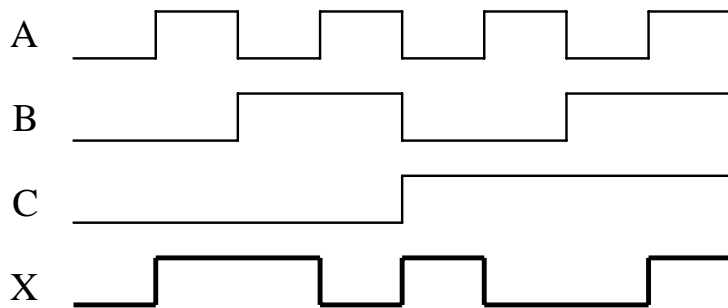


Figure 4-16 Sample Timing Diagram for a Three-Input XOR Gate

4.4 Combinational Logic

By themselves, logic gates are not very practical. Their power comes when you combine them to create *combinational logic*. Combinational logic connects multiple logic gates by using the outputs from some of the gates as the inputs to others. Figure 4-17 presents a sample of combinational logic.

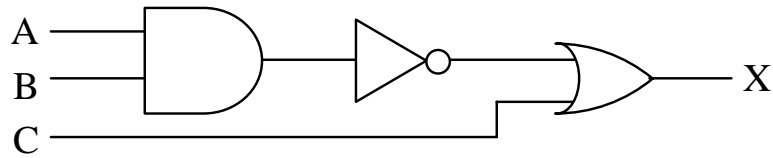


Figure 4-17 Sample Combinational Logic

In an earlier section, a security system was given as an example for an application of an OR gate: the alarm goes off if the door opens *or* the glass breaks *or* motion is detected. This circuit description is incomplete though; it doesn't take into account the fact that security systems can be armed or disarmed. This would extend our system description to: the alarm goes off if the system is armed *and* (the door opens *or* the glass breaks *or* motion is detected). The parentheses are added here to remove any ambiguity in the precedence of the logical operations. Figure 4-18 shows our new security circuit.

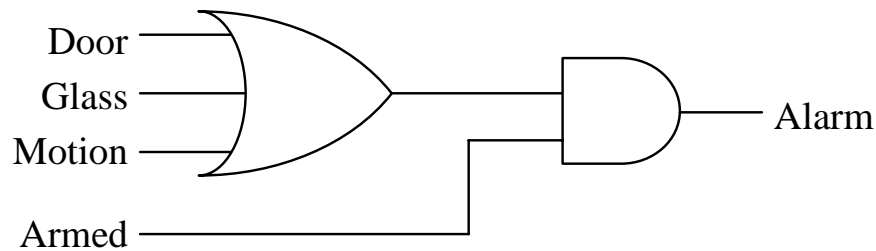


Figure 4-18 Combinational Logic for a Simple Security System

The operation of this circuit can also be represented with a truth table. Figure 4-19 shows how the four inputs, Door, Glass, Motion, and Armed, affect the output Alarm. Note that the output Alarm never goes high (logic 1) if the system is disarmed, i.e., Armed = logic 0. If the system is armed, Armed = logic 1, but none of the alarm inputs are set to a logic 1, then the alarm stays off. If, however, the system is armed and any one of the other inputs is a logic 1, then the alarm goes off, i.e., Alarm=1.

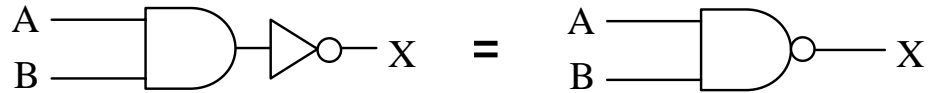
Armed	Door	Glass	Motion	Alarm
0	0	0	0	0
0	0	0	1	0
0	0	1	0	0
0	0	1	1	0
0	1	0	0	0
0	1	0	1	0
0	1	1	0	0
0	1	1	1	0
1	0	0	0	0
1	0	0	1	1
1	0	1	0	1
1	0	1	1	1
1	1	0	0	1
1	1	0	1	1
1	1	1	0	1
1	1	1	1	1

Figure 4-19 Truth Table for Simple Security System of Figure 4-18

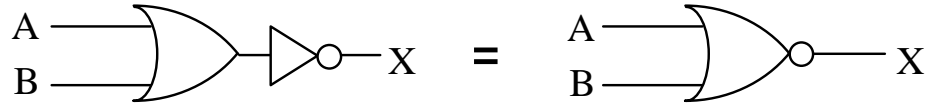
We determined the pattern of ones and zeros for the output column of the truth table through an understanding of the operation of a security system. We could have also done this by examining the circuit itself. Starting at the output side of Figure 4-18 (the right side) the AND gate will output a one only if *both* inputs are one, i.e., the system is armed and the OR gate is outputting a one.

The next step is to see when the OR gate outputs a one. This happens when *any* of the inputs, Door, Glass, or Motion, equal one. From this information, we can determine the truth table. The output of our circuit is equal to one when Armed=1 AND when either Door OR Glass OR Motion equal 1. For all other input conditions, a zero should be in the output column.

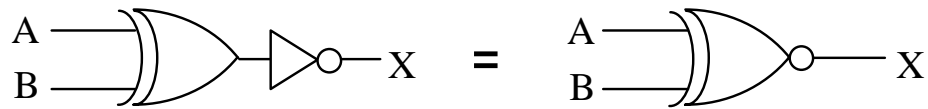
There are three combinational logic circuits that are so common that they are considered gates in themselves. By adding an inverter to the output of each of the three logic gates, AND, OR, and XOR, three new combinational logic circuits are created. Figure 4-20 shows the new logic symbols.



a) AND gate + NOT gate = NAND gate



b) OR gate + NOT gate = NOR gate



c) Exclusive-OR gate + NOT gate = Exclusive NOR gate

Figure 4-20 "NOT" Circuits

The NAND gate outputs a 1 if *any* input is a zero. Later in this book, it will be shown how this gate is in fact a very important gate in the design of digital circuitry. It has two important characteristics: (1) the transistor circuit that realizes the NAND gate is typically one of the fastest circuits and (2) every digital circuit can be realized with combinational logic made entirely of NAND gates.

The NOR gate outputs a 1 *only* if all of the inputs are zero. The Exclusive-NOR gate outputs a 1 as an indication that an even number of ones is being input to the gate.

A similar method is used to represent inverted inputs. Instead of inserting the NOT gate symbol in a line going to the input of a gate, a circle can be placed at the gate's input to show that the signal is inverted before entering the gate. An example of this is shown in the circuit on the right in Figure 4-21.

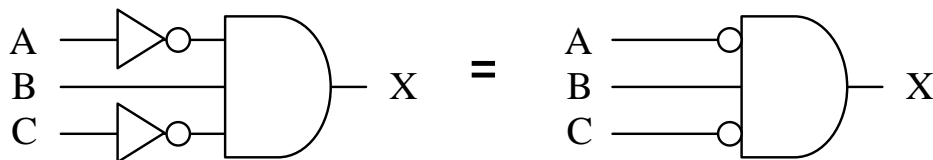


Figure 4-21 Schematic "Short-Hand" for Inverted Inputs

4.5 Truth Tables for Combinational Logic

Not all digital circuits lend themselves to quick conversion to a truth table. For example, input B in the digital circuit shown in Figure 4-22 passes through four logic gates before its effect is seen at the output.

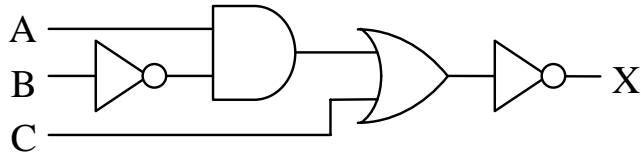


Figure 4-22 Sample of Multi-Level Combinational Logic

So how do we convert this circuit to a truth table? One method is to go through each pattern of ones and zeros at the input and fill in the resulting output in the truth table row by row. Figure 4-23 takes $A=0$, $B=0$, and $C=0$ through each gate to determine its corresponding output.

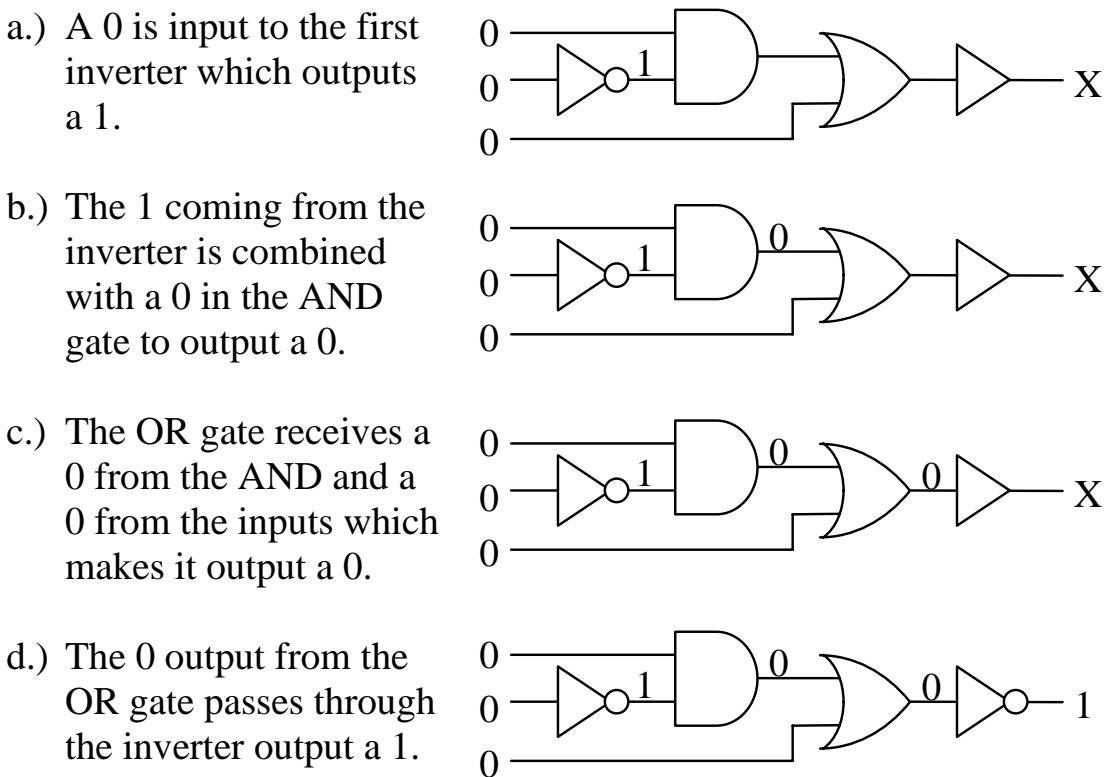


Figure 4-23 Process of Passing Inputs Through Combinational Logic

This process can be rather tedious, especially if there are more than three inputs to the combinational logic. Note that the bit pattern in Figure 4-23 represents only one row of a truth table with eight rows. Add another input and the truth table doubles in size to sixteen rows.

There is another way to determine the truth table. Notice that in Figure 4-23, we took the inputs through a sequence of steps passing it first through the inverter connected to the input B, then through the AND gate, then through the OR gate, and lastly through the inverter connected to the output of the OR gate. These steps are labeled (a), (b), (c), and (d) in Figure 4-24.

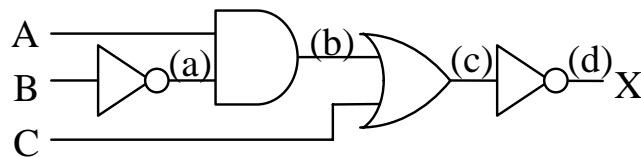


Figure 4-24 Steps That Inputs Pass Through in Combinational Logic

If we apply those same steps to the individual columns of a truth table instead of using the schematic, the process becomes more orderly. Begin by creating the input columns of the truth table listing all of the possible combinations of ones and zeros for the inputs. In the case of our sample circuit, that gives us a truth table with eight rows.

A	B	C
0	0	0
0	0	1
0	1	0
0	1	1
1	0	0
1	0	1
1	1	0
1	1	1

Figure 4-25 All Combinations of Ones and Zeros for Three Inputs

Next, add a column for each layer of logic. Going back to Figure 4-24, we begin by making a column representing the (a) step. Since (a) represents the output of an inverter that has B as its input, fill the (a) column with the opposite or inverse of each condition in the B column.

A	B	C	(a) = NOT of B
0	0	0	1
0	0	1	1
0	1	0	0
0	1	1	0
1	0	0	1
1	0	1	1
1	1	0	0
1	1	1	0

Figure 4-26 Step (a) in Sample Truth Table Creation

Next, step (b) is the output of an AND gate that takes as its inputs step (a) and input A. Add another column for step (b) and fill it with the AND of columns A and (a).

A	B	C	(a)	(b) = (a) AND A
0	0	0	1	0
0	0	1	1	0
0	1	0	0	0
0	1	1	0	0
1	0	0	1	1
1	0	1	1	1
1	1	0	0	0
1	1	1	0	0

Figure 4-27 Step (b) in Sample Truth Table Creation

Step (c) is the output from the OR gate that takes as its inputs step (b) and the input C. Add another column for (c) and fill it with the OR of column C and column (b).

A	B	C	(a)	(b)	(c) = (b) OR C
0	0	0	1	0	0
0	0	1	1	0	1
0	1	0	0	0	0
0	1	1	0	0	1
1	0	0	1	1	1
1	0	1	1	1	1
1	1	0	0	0	0
1	1	1	0	0	1

Figure 4-28 Step (c) in Sample Truth Table Creation

Last of all, step (d), the final output, is the inverse of the output of the OR gate of step (c). Make a final column and fill it with the inverse of column (c). This will be the final output column for the truth table.

A	B	C	(a)	(b)	(c)	X = (d) = NOT of (c)
0	0	0	1	0	0	1
0	0	1	1	0	1	0
0	1	0	0	0	0	1
0	1	1	0	0	1	0
1	0	0	1	1	1	0
1	0	1	1	1	1	0
1	1	0	0	0	0	1
1	1	1	0	0	1	0

Figure 4-29 Step (d) in Sample Truth Table Creation

This can be done with any combinational logic circuit. Begin by creating a table from the list of combinations of ones and zeros that are possible at the inputs. Next, determine the order of gates that the signals come to as they pass from the input to the output. As each set of signals passes through a gate, create another column in the truth table for the output of that gate. The final column should be the output of your combinational logic circuit.

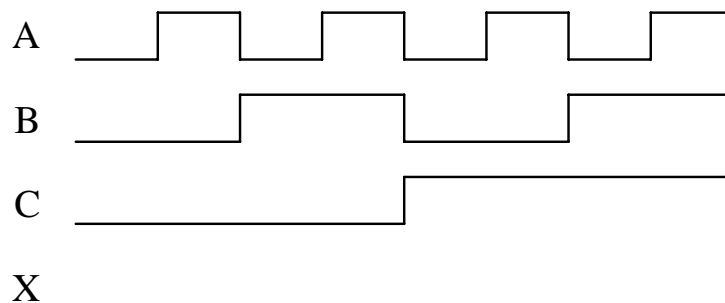
4.6 What's Next?

The introduction of logic operations and logic gates opens up the field of computer design. Topics ranging from the mathematical circuitry inside the processor to the creation and delivery of an Ethernet message will no longer remain abstract concepts.

Chapter 5 presents a mathematical-like method for representing logic circuits along with some techniques to manipulate them for faster performance or a lower chip count. These tools can then be used to effectively design the components of a computer system.

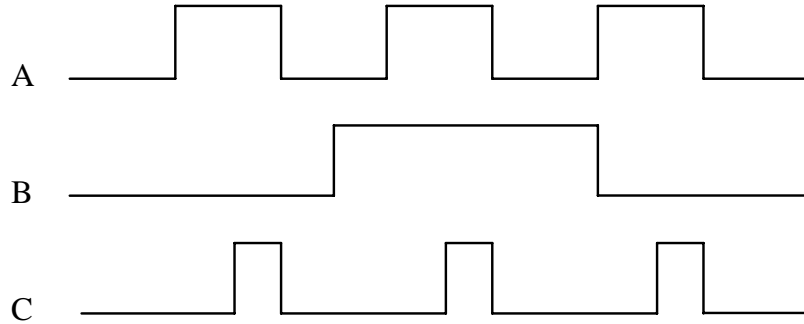
Problems

1. Identify a real-world example for an AND gate and one for an OR gate other than those presented in this chapter.
2. How many rows does the truth table for a 4-input logic gate have?
3. Construct the truth table for a four-input OR gate.
4. Construct the truth table for a two-input NAND gate.
5. Construct the truth table for a three-input Exclusive-NOR gate.
6. Construct the truth table for a three-input OR gate using don't cares for the inputs similar to the truth table constructed for the three-input AND gate shown in Figure 4-13.
7. Draw the output X for the pattern of inputs shown in the figure below for a three input NAND gate.



8. Repeat problem 7 for a NOR gate.

9. Show the output waveform of an AND gate with the inputs A, B, and C indicated in the figure below.



$$A \cdot B \cdot C$$

10. Develop the truth table for each of the combinational logic circuits shown below.

